

Achievement test in Visual Art Drawing

Evaluation/exercise: The teacher evaluates the class with the multiple-choice questions.

Achievement test in drawing I

INSTRUCTION:

Select the alternative (A) to (D) that best answers the question or completes the statement.

1. What form of art meet the eye and evoke an emotion through an expression of skill and imagination?
 - (A) Musical arts
 - (B) Liberal arts
 - (C) Performing arts
 - (D) Visual arts
2. Which of this is not fine art area specialization?
 - (A) Ceramics
 - (B) Painting
 - (C) Sculpture
 - (D) printmaking
3. Which of this best describe the element of art that is bounded by two distinct end points and also one-dimensional?
 - (A) Form
 - (B) Line
 - (C) Shape
 - (D) Space
4. Which of this is **NOT** considered as a type of line?
 - (A) Horizontal lines
 - (B) Zigzag line
 - (C) Vertical lines
 - (D) Bend lines
5. Which of this art elements has three-dimensional view?
 - (A) Form
 - (B) Line
 - (C) Shape
 - (D) Space
6. How can you depict the depth of perception by varying the level of darkness in your drawing?

- (A) Striking
- (B) Stacking
- (C) Shading
- (D) Darking

7. Which of this element has cylinder as an example?

- (A) Shape
- (B) Shade
- (C) Colour
- (D) Form

8. Which form of drawing is applicable to all drawing where instruments, such as compasses and rulers are not used?

- (A) Geometric drawing
- (B) Life drawing
- (C) Free-hand drawing
- (D) Object drawing

9. Which of this elements of art is created when lines meet and create an enclosure?

- (A) Form
- (B) Line
- (C) Shape
- (D) Space

10. Which technique of shading is made up of perpendicular lines of varying closeness are drawn in a grid pattern?

- (A) Blending Shading
- (B) Parallel hatching
- (C) Cross hatching
- (D) Scribbling Shading

11. Which of this is **NOT** an element of art?

- (A) line
- (B) texture
- (C) colour
- (D) harmony

12. Fundamentals or rules that guide the making of art is known as?

- (A) Element of Art
- (B) Artist statement
- (C) Principles of Art

(D) Visuals of arts

13. What category of line best described a loose, curving lines like those found in nature?

- (A) Inorganic line
- (B) Horizontal lines
- (C) Vertical lines
- (D) Organic line

14. What type of line best described a line that are made from combined diagonal lines, that can create a feeling of confusion or suggest action. ?

- (A) Horizontal line
- (B) Vertical lines
- (C) Curved lines
- (D) Zigzag line

15. What type of line best described a line that run up and down, seem to show dignity, formality, and strength?

- (A) Horizontal line
- (B) Vertical lines
- (C) Curved lines
- (D) Zigzag line

16. What type of line best described a line that run parallel to the ground, appear to be at rest?

- (A) Horizontal line
- (B) Vertical lines
- (C) Curved lines
- (D) Zigzag line




figure A

17. The drawing above in figure A, is a typical example of type of shape?

- (A) Geometric shape
- (B) Organic shape
- (C) Inorganic shape
- (D) Sum shape

18. The drawing in figure A, was drew mainly using what type of lines?

- (A) Horizontal line
- (B) Vertical lines
- (C) Curved lines
- (D) Zigzag line




figure B

19. What type of shading is use for the object is figure B?

- (A) Blending Shading
- (B) smooth hatching
- (C) Cross hatching
- (D) Dots Shading

20. Which form best described the object in figure B?

- (A) Cone
- (B) Cube
- (C) Cylinder
- (D) Sphere

Evaluation/exercise: The teacher evaluates the class with the multiple-choice questions.

Achievement test in drawing II

INSTRUCTION:

Select the alternative (A) to (D) that best answers the question or completes the statement.

1. Which of this best define what a drawing is?
 - (A) a tool for revitalization and visioning
 - (B) system of creating sculptural piece using paper
 - (C) system of representing visual ideas and thoughts on a surface such as paper
 - (D) a means of depicting three dimensional reality on space, cloud and the moon

2. Which of this is not an importance of drawing
 - (A) Drawing regularly help us to train and enhance our visual ability.
 - (B) Drawing provides an easy means of communication a visual idea, concept and self-expression.
 - (C) Drawing and arts in generally help in intensifying aesthetic awareness and appreciation of indigenous art and local materials.
 - (D) Drawing, art and design reduces the learner's attention span, tolerance, commitment and interpretation of facts.

3. What form of drawing does not allow the use of instruments, such as compasses and rulers.
 - (A) Geometric
 - (B) Non-free-hand drawing
 - (C) Free-hand drawing
 - (D) Hand drawing

4. Which form of drawing is allowed in visual arts?
 - (A) Non-free-hand drawing
 - (B) Free-hand drawing
 - (C) Hand drawing
 - (D) Geometric

5. Drawing from memories is a typical example of which category of drawing?
 - (A) Drawing from internal reality
 - (B) Drawing from external reality
 - (C) Geometric
 - (D) Free-hand drawing

6. Drawings that imitates God's creations that has life, such as human being, animals, tress and other natural phenomenon is called

- (A) still-life drawing
- (B) life drawing
- (C) man drawing
- (D) God drawing

7. Drawings that imitates man's creations that **DOES NOT** have life, such as furnitures, kitchen utensils is called

- (A) still-life drawing
- (B) life drawing
- (C) man drawing
- (D) God drawing

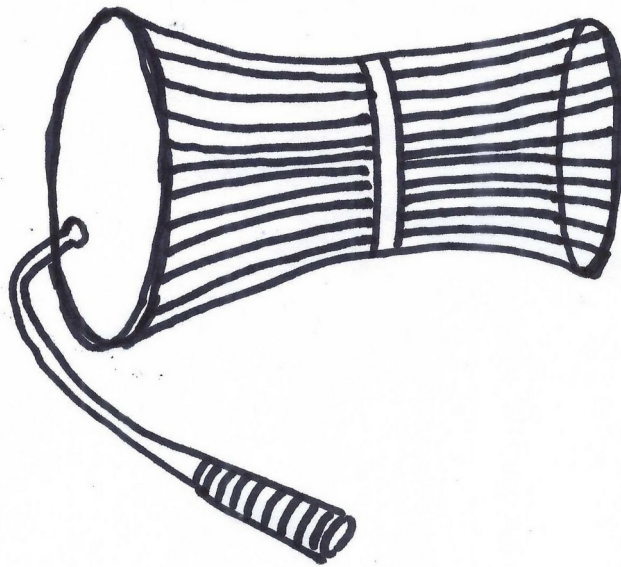


figure C

8. Which type of drawing best describe the drawing above in figure C?

- (A) Life drawing
- (B) Music drawing
- (C) Still-life drawing
- (D) Nature drawing

9. Look at the drawing in figure C and choose the option that best describe the type of line to draw it?
- (A) Free-hand drawing
 - (B) Non-free-hand drawing
 - (C) Hand drawing
 - (D) Geometric
10. As a visual artist which form of drawing will you use to draw the item in figure D
- (A) Free-hand drawing
 - (B) Non-free-hand drawing
 - (C) Ruler drawing
 - (D) Geometric




figure D

11. Which type of drawing best describe the drawing in figure D?
- (A) Life drawing
 - (B) Music drawing
 - (C) Still-life drawing
 - (D) Nature drawing

12. The drawing in figure D is basically made up of?

- (A) Hue
- (B) Red
- (C) Blue
- (D) Lines



Figure E. **Title: YabaTech car park.** Medium: Pen on Paper. Year: 2014
Source: The Researcher

13. The drawing in figure E titled "YabaTech car park", have how many vehicles in it?

- (A) 6
- (B) 7
- (C) 8
- (D) 9

14. The buildings in the drawing in figure F are typical example of what type of drawing?

- (A) Life drawing
- (B) Music drawing
- (C) Still-life drawing
- (D) Painting

15. The trees in the drawing in figure F are typical example of what type of drawing?

- (A) Life drawing
- (B) Music drawing
- (C) Still-life drawing

(D) Painting

Evaluation/exercise: The teacher evaluates the class with practical drawing exercises

Achievement test in drawing III (Still-life drawing practical)

INSTRUCTION:

Please use a sheet of A4 paper provided and pencil to make a free-hand drawing of the objects below:

1. Local pot (ikoko)



Figure G: **Local Pot (Ikoko)** Source: The researcher

2. Talking drum (gangan)




Figure H: **Talking Drum (Gangan)** Source: The researcher

3. Traditional stool




Figure I: **Traditional stool.** Source: The researcher

Evaluation/exercise: The teacher evaluates the class with the life drawing exercises

Achievement test in drawing IV (Life drawing practical)

INSTRUCTION:

Please use a sheet of A4 paper provided and pencil to make a free-hand drawing of the figures below:

1. Yoruba couple



Figure K: **Yoruba couple**. Source: The researcher

2. Market scene



Figure L: **Market Scene.** Source: The researcher